



Question 1 continued

Lined area for writing the answer to Question 1.

Leave
blank

Q1

(Total 6 marks)

Turn over



3.

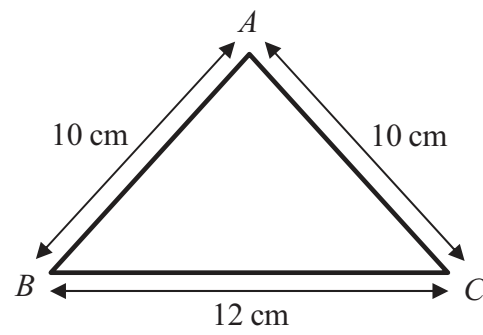


Figure 1

A triangular frame is formed by cutting a uniform rod into 3 pieces which are then joined to form a triangle ABC , where $AB = AC = 10$ cm and $BC = 12$ cm, as shown in Figure 1.

(a) Find the distance of the centre of mass of the frame from BC . (5)

The frame has total mass M . A particle of mass M is attached to the frame at the mid-point of BC . The frame is then freely suspended from B and hangs in equilibrium.

(b) Find the size of the angle between BC and the vertical. (4)



5. [In this question \mathbf{i} and \mathbf{j} are perpendicular unit vectors in a horizontal plane.]

A ball of mass 0.5 kg is moving with velocity $(10\mathbf{i} + 24\mathbf{j}) \text{ m s}^{-1}$ when it is struck by a bat. Immediately after the impact the ball is moving with velocity $20\mathbf{i} \text{ m s}^{-1}$.

Find

- (a) the magnitude of the impulse of the bat on the ball, **(4)**

- (b) the size of the angle between the vector \mathbf{i} and the impulse exerted by the bat on the ball, **(2)**

- (c) the kinetic energy lost by the ball in the impact. **(3)**





Question 5 continued

Leave
blank

Lined writing area for the answer to Question 5.

(Total 9 marks)

Q5



N 3 5 3 9 1 A 0 1 9 3 2



6.

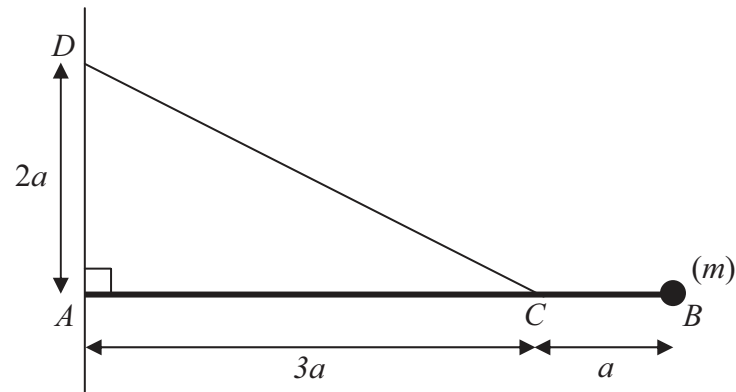


Figure 2

Figure 2 shows a uniform rod AB of mass m and length $4a$. The end A of the rod is freely hinged to a point on a vertical wall. A particle of mass m is attached to the rod at B . One end of a light inextensible string is attached to the rod at C , where $AC = 3a$. The other end of the string is attached to the wall at D , where $AD = 2a$ and D is vertically above A . The rod rests horizontally in equilibrium in a vertical plane perpendicular to the wall and the tension in the string is T .

(a) Show that $T = mg\sqrt{13}$. (5)

The particle of mass m at B is removed from the rod and replaced by a particle of mass M which is attached to the rod at B . The string breaks if the tension exceeds $2mg\sqrt{13}$. Given that the string does not break,

(b) show that $M \leq \frac{5}{2}m$. (3)



Question 6 continued

Lined area for writing the answer to Question 6.

Leave blank

Q6

(Total 8 marks)



7.

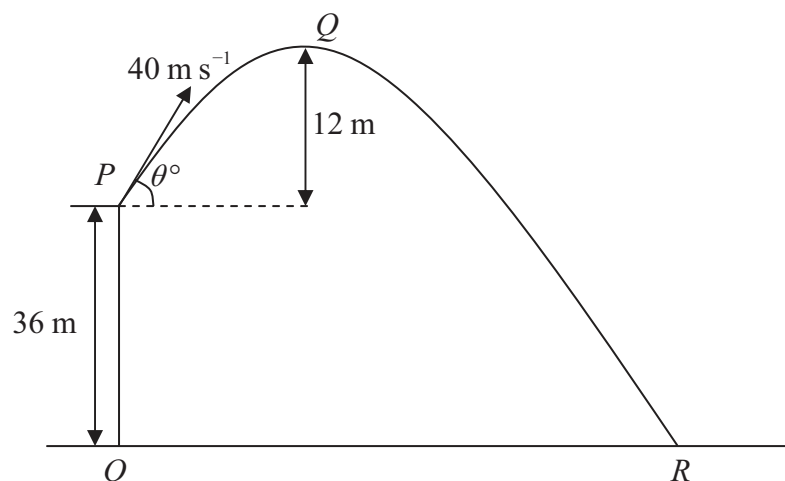


Figure 3

A ball is projected with speed 40 m s^{-1} from a point P on a cliff above horizontal ground. The point O on the ground is vertically below P and OP is 36 m. The ball is projected at an angle θ° to the horizontal. The point Q is the highest point of the path of the ball and is 12 m above the level of P . The ball moves freely under gravity and hits the ground at the point R , as shown in Figure 3. Find

- (a) the value of θ , **(3)**

- (b) the distance OR , **(6)**

- (c) the speed of the ball as it hits the ground at R . **(3)**



Leave
blank

Question 7 continued

Lined area for writing the answer to Question 7.

Q7

(Total 12 marks)

27

Turn over



N 3 5 3 9 1 A 0 2 7 3 2



Question 8 continued

Lined area for writing answers.

Leave blank



